

EXAM REVIEW Sheet – 1

1) Fill in the missing boxes.

Figures	Words	Split into values/ Partition/Expanded Form
4 235	Four thousand two hundred and thirty-five	
50 050		_____ + 50
	Nine hundred thirty-two thousand three hundred and seventy-eight	900 000 + _____ + 2 000 + _____ + 70 + _____
643 709		

2) Use each set of digits to make the largest and smallest number possible.

Digits	Largest	Smallest
5 7 0 2		
7 3 8 4		
2 1 9 5		

3) What is the place value of the digit 3 in the number 573662?

Put a ring around the correct answer.

Hundredths thousand hundred 3 thousands 3 tens

4) Round the given numbers to the indicated place.

a) 4 785 (nearest hundred) -----

b) 9 355 (nearest thousand) -----

c) 3 808 (nearest thousand) -----

d) 383 (nearest tens) -----

5) Predict whether the sum, difference or product is even or odd?

odd + even =

even + odd =

odd - even =

even - odd =

even + even =

odd + odd =

odd × even =

odd × odd =

even × odd =

even × even

6) Use <, > to make each statement correct.

(a) 308 008 308 808

(b) 124 990 124 099

7) Write these measurements in order of size starting with the smallest.

(a) 27 396, 25 281, 27 301, 25 847, 24 783.

8) Fill the missing numbers.

$$77\,532 = 70\,000 + \boxed{} + 500 + 30 + 2$$

9) The Christmas Fair is a special event at Fred's school.

There were 1236 visitors.

(i) Round 1236 to the nearest ten.

(ii) Round 1236 to the nearest hundred.

(iii) One quarter of the visitors were children.

How many children were there? _____ children

10)



Use the numbers above to answer these questions.


a) Which number can be **rounded to 58,000**?

b) Which number has **5** in the **ten** position?

c) Choose **two whole** numbers which give an **odd** answer when **added together**.

356	+	_____
-----	---	-------

11) Use the number cards to complete the following calculations.



			+	3	7	=	199
--	--	--	---	---	---	---	-----

EXAM REVIEW Sheet – 2

1) Write in words the place value of each underlined digit.

(a) $\underline{2}.98$ =

(b) $5.\underline{55}$ =

(c) $814.\underline{37}$ =

(d) $4.\underline{98}$ =

2) Put a decimal point in each of these number so that the 3 has a value of 3 tenths.

1 2 3 4 1 4 2 3 1 2 4 3 4 3 2 1

3) What is the place value of the digit 3 in the number 246.63?

Put a ring around the correct answer.

Hundredths hundreds tenths 3 hundredths 3 tenths

4) Use < or > to make each statement correct.

(a) 5.15 5.5 (b) 6.8 6.79

(c) 25.6 25.26 (d) 11.03 11.3

5) Write these measurements in order of size starting with the smallest.

(a) 26.63 m, 2.66 m, 26.7 m, 25.8 m, 25.74 m.

(b) 1.05 kg, 1.7 kg, 1.34 kg, 1.52 kg, 1.5 kg

(c) 4.6 m, 4.23 m, 4.1 m, 4.21m, 4.08m

6) Round each amount to the nearest dollars.

(a) \$ 2.05

(b) \$ 2.54

(c) \$ 9.69

(d) \$ 7.42

7) Joe Says:

What number is Joe thinking of?

Draw a ring around all the possible answers.

I am thinking of a number. If I round it to the nearest whole number, the answer is 5.

5.45

4.05

4.85

5.55

5.25

5.92

8) Write the expanded form of following decimal numbers.

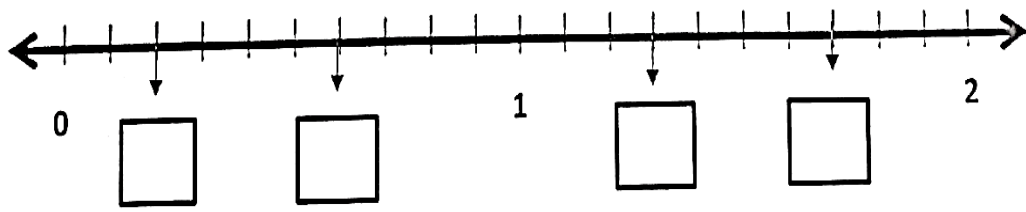
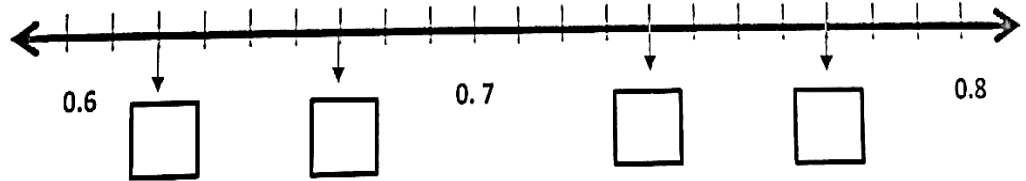
12.6	
53.04	
2.93	
0.51	

9) Write the missing numbers in the boxes to complete the sequences.

(a) 3.27, 3.28

(b) 4.6, 4.7, 4.9

10) Look at the number lines. what number goes into each box.



11) What is the halfway between 1.5 and 2.1? -----

12) Here are five cards:

2	3	6	8	9
---	---	---	---	---

Use each card once only to complete the statements below:

(a) $6.7 > \square . 9$ (b) $3.5 < \square . 9$

(c) $\square . 4 < \square . 2$ (d) $6 . \square > 6.6$

13) Amira bought a bag of sweets for \$6.05

What is the cost of 10 bags of sweets? \$ -----

14) Complete the table by converting the amount in dollars to cents and cents
To dollars.

Dollars (\$)	56		13	
Cents		100		9200

(a) $8.4 \times 10 =$ -----

(b) $8.4 \times 100 =$ -----

(c) $1.32 \times 10 =$ -----

(d) $1.32 \times 100 =$ -----

16) Round the decimal to the indicated place.

0.98 (nearest whole number)	
29.57 (nearest tenth)	
149.7 (nearest hundreds)	
35.89 (nearest tenth)	
86.66 (nearest whole number)	

17) Write '**True**' or '**False**' against each statement.

(a) $245 \times 10 > 24 \times 100$ -----

(b) $2.45 \times 100 < 24 \times 10$ -----